

**REVISION( 2017-18)**

**SUBJECT- ENGLISH**

**GRADE- 4**

Time allotted: 1 hours

Maximum Marks: 40

The question paper is divided into four sections:

Section A	Reading	6 marks
Section B	Writing	12 marks
Section C	Grammar	10 marks
Section D	Literature	12 marks

**GENERAL INSTRUCTIONS:**

- 1.All questions are compulsory**
- 2. You may attempt any section at a time.**

**Section- A**

**Reading (6 Marks)**

**A.1 Read the following passage carefully:**

(1)Vegetables are an important part of human diet. The green vegetables consist of leaves, buds, young shoots and often the entire plant. They contain plenty of vitamins, certain proteins, cellulose and water. Cabbage, carrots, cauliflower, pumpkin, capsicum, broccoli, green beans, spinach, mustard leaves, peas and tomatoes are some of the vegetables which have very great nutritional value.

(2)Vegetables are a delightful way to lighten up a meal, and they combine well with most other food items like cereals and grains. Being, in general, light and moist, they are some of the easiest foods to digest when properly prepared, Researchers have found that regular and more use of vegetables can help in preventing serious health hazards like cancer, heart disease and obesity.

(3)Since vegetables are low in calories and help to lose weight, one should, while increasing the level of activity, escalate their consumption. Vegetables are also very low in the kind of fat linked to heart disease and they do not raise cholesterol.

(4)Due to the increased use of pesticides, all the vegetables should be sufficiently washed before. Eating of salads and raw vegetables require more careful cleansing.

**Write the option you consider the most appropriate.**

1. The most important reason why we should eat green vegetables is

- (a) they contain plenty of water                      (b) they have great nutritional value  
(c) they can be easily cooked                      (d) their all parts are edible

2. Why are vegetables easy to digest?

- (a) they combine well with cereals and grains                      (b) they are light and full of water  
(c) they lighten up a meal                      (d) they can be properly prepared

3. How are vegetables a boon for very fat people and heart patients?

- (a) they are low in calories                      (b) they are a good source of iron  
(c) they have a kind of fat linked to heart disease                      (d) they are easily digestible

4. Why does the author recommend that vegetables, especially salads should be thoroughly washed?

- (a) for more careful cleansing                      (b) to wash soil off their roots  
(c) to wash pesticides off their skins                      (d) to remove worms from them

5. The word 'escalate' (paragraph 3) can be replaced by

- (a) restrict                      (b) lighten  
(c) reduce                      (d) increase

**6. Find the synonyms of the following words from the passage**

- a) significant (para 1)-  
b) dangers (para 2)-

## **Section- B**

### **Writing( 12 marks)**

**B2.** You are Rohan Verma, Head boy of Trinity Public School, Ambala. Your school is going to organise a collage making competition on famous monuments of Dubai. Write a notice to inform the students.  
**.( 5 Marks)**

**B4.** Write a letter to your cousin who lives in another city describing one of your favourite teachers. Include the following points in your letter: **(8 Marks)**

- ) Who that teacher is, how charming he/she is
- ) How he/she teaches in the class
- ) Ask your cousin about his studies and request him/her to describe his/her favourite teacher, too

### Section- C

#### Grammar- 10 marks

##### C1. Choose the suitable prepositions ( 6x1/2 = 3 Marks)

Yesterday Rohit went to visit his best friend, Sohan and his brand new bicycle was stolen a) \_\_\_\_\_ (of/from/in) there. He locked the cycle b) \_\_\_\_\_ (after/before/on) entering Sohan's house. But when he came out (c) \_\_\_\_\_ ( on/at/after) about two hours, the cycle was missing. They both were stunned. They tried to trace out the cycle but all (d) \_\_\_\_\_ ( on/in/by) vain. Rohit bought it last week (e) \_\_\_\_\_ (by/from/at) M/s Banwari Lal and Sons. It is fitted (f) \_\_\_\_\_ ( on/in/with) a bell, basket, and a carrier.

##### C2. Choose the correct form of the verbs (4x1=4 Marks)

Talent Search Contest (a) \_\_\_\_\_ ( are held/was held/were held) in our school on August 8, 2015. Many students (b) \_\_\_\_\_ ( participate/participating/participated) in this contest. The students showed their talents in (c) \_\_\_\_\_ ( act/acted/acting) and singing. Our Principal was the Chief Guest. She (d) \_\_\_\_\_ ( was praised/ praised/ praises) the young artists.

##### C3. Choose the suitable conjunction (6x1/2=3 marks)

(although, and, so, if, because, otherwise)

I must go to school (a) \_\_\_\_\_ I have an important test today. (b) \_\_\_\_\_ I'll miss my school today then I'll not be able to understand social science lessons. I have to work hard (c) \_\_\_\_\_ I'll not score good marks in my test (d) \_\_\_\_\_ mom will scold me. (e) \_\_\_\_\_ my elder sister is guiding in my studies still I need more practice , (f) \_\_\_\_\_ I'll talk to my mother regarding coaching classes.

### Section-D

#### (Literature: 12 Marks)

##### D2: Read the given lines and answer the following briefly (1x2=2 Marks)

“But there IS an Aunt Polly”

- a) Who spoke these words to whom?
- b) Why did the speaker say so?

##### D3. Answer the following questions in 30-40 words ( 2x3= 6 Marks)

- a) Imagine you come across the same situation like Vijay, what would you do to confront the dacoits?
- b) ‘Hard work and strong determination are the keys to success’. Do you agree with the statement? Justify your answer on the basis of the chapter ‘Teller of fairy tales’

c) At the end, when uncle was nowhere to be seen, what did Kentaro understand?

**D4. Answer the following in 60-80 words: (1 x 4=4)**

Imagine you are Pollyanna and you met Nancy instead of Aunt Polly. Pen down about your meeting with Nancy in your diary.

**OR**

Relate a real incident in a paragraph where you had put the blame on Mr. Nobody?

*दोहराई प्रश्नपत्र- 1 (2017-18)*

विषयः हिन्दी

कक्षाः चार

समय : 3 घंटे

अधिकतम अंकः 40

निर्देशानुसार प्रश्नों के उत्तर दें:

कः प्रश्न पत्र चार खंडों में विभक्त है, क, ख, ग तथा घ।

खः प्रत्येक प्रश्न को ध्यान से पढ़ें।

गः क्रमानुसार प्रश्नों के उत्तर दें।

घः साफ और सुंदर शब्दों में लिखें।

(भाग-क)

(1) निम्नलिखित गद्यांश को पढ़कर प्रश्नों के उत्तर लिखें :-

(5)

पंडित शादीराम को यह आशा न थी कि कोयले की खान में हीरा मिल जाएगा। घोर निराशा ने सभी द्वार बंद कर दिए थे। लाला किशनचंद के कहने से पंडित जी दिनभर बैठ कर तसवीरें छाँटते रहे। शाम तक दो सौ बढ़िया चित्र जमा हो गए। उस समय वे उन्हें देखकर स्वयं उछल पड़े। उनके मुख पर खुशी चमकने लगी। उन्हें एक-एक चित्र सौ-सौ रुपये का नोट लग रहा था। लाला किशनचंद जी ने चित्रों को एलबम में लगवाया और समाचार पत्रों में विज्ञापन दे दिया। एक दिन पंडित शादीराम जी की किस्मत चमकी और उनके भाग्य ने करवट बदली।

प्रश्न :1 पंडित शादीराम को किस बात की आशा न थी ?

1

प्रश्न :2 किस के कहने से पंडित जी दिनभर बैठ कर तसवीरें छाँटते रहे ?

1

प्रश्न :3 उन्हें एक-एक चित्र क्या लग रहा था ?

1

प्रश्न :4 लाला किशनचंद जी ने चित्रों को क्या किया ?

1

प्रश्न :5 पद्यांश में से दो चंद्रबिंदु वाले और दो आधे अक्षर वाले शब्द ढूँढ कर लिखें।

1

(2) निम्नलिखित वाक्यों में से सर्वनाम शब्दों को ढूँढ कर उत्तर पुस्तिका में लिखिए- 2

- i) घर में मेरे मामा जी आए हैं।
- ii) दवाई खाने से आप ठीक हो जाएँगे।

(3) निम्नलिखित वाक्यों में से संज्ञा शब्दों को ढूँढ कर उत्तर पुस्तिका में उनके भेद सहित लिखिए- 2

- i) यह ईमारत बहुत सुंदर है।
- ii) दिल्ली बहुत दूर है।

(4) निम्नलिखित चित्र को देखकर सही क्रिया शब्द लिखकर उसका वाक्य प्रयोग करें व सही भेद लिखें: 2

1.



2



(5) निम्नलिखित शब्दों के 2-2 पर्यायवाची शब्द लिखो :- 2

- 1. पथ -
- 2. बाग -

(6) निम्नलिखित पठित गद्यांश को पढ़कर प्रश्नों के उत्तर लिखें - (5)

बालक जब चित्रकला सीखकर चित्र बनाना जान लेता है, तब यदि अक्षर लिखना सीखें तो अक्षर मोतियों जैसे हो जाते हैं। अपने आचरण की तरफ मैं बहुत ध्यान देता था। इसमें यदि कोई भूल हो जाती तो मेरी आँखों में आँसू आ जाते। मुझे याद है कि मुझे एक बार मार खानी पड़ी थी। मुझे मार का दुख न था। पर मैं दंड का पात्र समझा गया; इस बात का बहुत दुःख था। दूसरी बात सातवीं कक्षा की है। उस समय

हैडमास्टर जी कड़ा अनुशासन रखते थे। फिर भी वे विद्यार्थियों के प्रिय थे। उन्होंने कक्षा के लिए व्यायाम और क्रिकेट अनिवार्य कर दिए थे। मेरा मन इन चीज़ों में न लगता था।

प्र०1 अक्षर मोतियों जैसे कब हो जाते हैं ? 1

प्र०2 गाँधी जी को किस बात का दुःख था? 1

प्र०3 गाँधी जी का मन किस बात में नहीं लगता था, हैडमास्टर जी ने क्या अनिवार्य कर दिया था ? 1

प्र०4 गद्यांश से दो (2) संज्ञा शब्द छँटकर उसका भेद लिखो। 2

(8) पाठ्यपुस्तक के आधार पर नीचे लिखे प्रश्नों के उत्तर लिखें - (2)

प्र०2 शहरों में किन चीज़ों से प्रदूषण फैलता है, प्रदूषण को कैसे कम किया जा सकता है ? 1

प्र० 4 जंगली जानवरों के अनुसार ,पेड़ों से उन्हें क्या बाधा थी ? 1

10)निम्नलिखित प्रश्नों के उत्तर पाठ्य पुस्तक के आधार पर दीजिए : (4)

प्र० 1 सुबह कविता में कवि ने गुण और दुर्गुण किसे कहा हैं ? 1

प्र० 4 इस कविता से आप के मन में कौन सी भावनाएँ उत्पन्न होती हैं ? 1

प्र० 5 निम्न पंक्तियों का भाव स्पष्ट कीजिए- 2

मुझे तोड़ लेना वनमाली ,उस पथ पर तुम देना फेंक,

मातृ भूमि पर शीश चढ़ाने, जिस पथ पर जावें वीर अनेक ।

(भाग -घ)

(11) अपने मित्र को अपनी बहन की शादी पर आमंत्रित करते हुए पत्र लिखें। 5

(12)दीवाली ' विषय पर अनुच्छेद लिखें। 6

(13) डायरी लेखन: आप छुट्टियों में किसी पहाड़ी स्थान पर गए थे,वहाँ बिताए किसी एक खास दिन पर डायरी लिखें। 5

**Half Yearly (September 2017-18)**  
**Computer Science(Revision)**  
**Class IV**

Time: 1 hrs.

M.M: 20

**General Instructions:**

- Read the questions carefully and answer them in sequence.
- All the questions are compulsory.
- Mark distribution is indicated with each question.

**Q1** What is a Container? Name the types of container? Give one example of each container? **(2)**

**Q2.** Differentiate between RAM and ROM? **(1)**

**Q3** What is the difference between pen width and fontsize command? **(1)**

**Q4** Write the output of the following code **(1)**

**a)** repeat 4  
{  
fw 50  
tr 90  
}

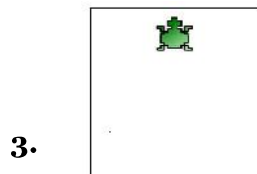
**b)** repeat 360  
{  
fw 1  
tr 1  
}

**Q5** Write the full form of following. **(1)**

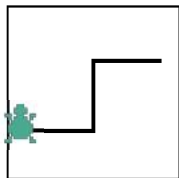
- DVD
- EEPROM

**Q6** In a Practical exam of Computer, Teacher has given instructions to the students to draw a Christmas tree and the background color of canvas should be yellow. Priya while doing her practical forgets color Code of yellow. How can she find the color code now? **(1)**

**Q7** Identify the names of the following. **(1.5)**



**Q8** Write the code for the following **(1)**



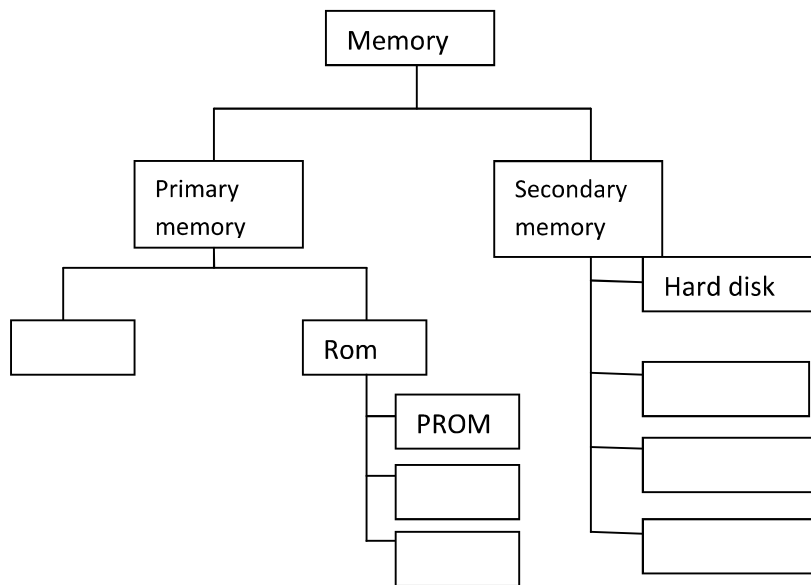
**Q9 One word:** **(0.5x5=2.5)**

- This command is used to run a part of a program repeatedly.
- Keyboard shortcut to execute commands in Kturtle.
- Command used to generate unpredictable number.
- Metallic disk inside the hard disk is called
- Device that stores least memory.



Q10. Complete the diagram.

(3)



Q11 State whether the statement is true or false .Rewrite the statement if it is false (0.5x5=2.5)

- a) The name of container must start with (#) symbol.
- b) The container for string must contain **only letters**.
- c) Pendrive is an example of **primary memory**
- d) CD stands for computer **disk**
- e) **Hard disk** is a portable device

Q12 MCQ's:

(0.5x5=2.5)

- 1. Standard size of DVD
  - a) 700 MB
  - b) 4.7 GB
  - c) 750 MB
  - d) 4.5 GB
- 2. This command instructs the turtle to use pen to draw on the screen.
  - a) Pendn
  - b) dp
  - c) pd
  - d) pu
- 3. \_\_\_\_\_ is equivalent to 8 bit
  - a) Bit
  - b) Nibble
  - c) Byte
  - d) GB
- 4. To make the turtle turn left we use \_\_\_\_\_ command.
  - a) tr
  - b) leftturn
  - c) tl
  - d) lt
- 5. \_\_\_\_\_ command is used to clean up the screen after you have made a mess on it and bring the turtle to its home position
  - a) clean
  - b) reset
  - c) center
  - d) home

ਜਮਾਤ : ਚੌਥੀ

ਵਿਸ਼ਾ : ਪੰਜਾਬੀ

ਦੁਹਰਾਈ ਪ੍ਰੀਖਿਆ -1 (2017-18)

ਕੁੱਲ ਅੰਕ=40

ਭਾਗ (ੳ) ਗਿਆਨ ਅਤੇ ਵਿਚਾਰ (ਪੜ੍ਹਨ ਕੌਸ਼ਲ) (ਅਣਡਿੱਠਾ ਪੈਰਾ)

(5 × 1=5)

ਮਹਾਰਾਜਾ ਰਣਜੀਤ ਸਿੰਘ ਇੱਕ ਮਹਾਨ ਰਾਜਾ ਸੀ। ਉਹ ਪਰਜਾ ਨਾਲ ਸੱਚਾ ਪਿਆਰ ਕਰਦਾ ਸੀ। ਉਹ ਲੋਕਾਂ ਦੇ ਦੁੱਖ-ਸੁੱਖ ਜਾਨਣ ਲਈ ਭੇਸ ਬਦਲ ਕੇ ਦੌਰਾ ਕਰਦਾ ਹੁੰਦਾ ਸੀ। ਇੱਕ ਵਾਰ ਰਾਜ ਵਿੱਚ ਕਾਲ ਪੈ ਗਿਆ। ਮਹਾਰਾਜੇ ਨੇ ਅੰਨ ਦੇ ਭੰਡਾਰ ਖੋਲ ਦਿੱਤੇ। ਇੱਕ ਬੁੱਢਾ ਕਤਾਰ ਵਿੱਚ ਖੜ੍ਹਾ ਸੀ। ਦਸ ਸੇਰ ਰਾਸ਼ਨ ਲੈ ਕੇ ਵੀ ਉਸਨੂੰ ਤਸੱਲੀ ਨਹੀਂ ਸੀ ਹੋਈ। ਉਸ ਕੋਲੋਂ ਪਹਿਲਾਂ ਥੈਲਾ ਤਾਂ ਚੁੱਕਿਆ ਨਹੀਂ ਸੀ ਜਾ ਰਿਹਾ ਪਰ ਫਿਰ ਵੀ ਹੋਰ ਅਨਾਜ ਲੈ ਕੇ ਜਾਣਾ ਚਾਹੁੰਦਾ ਸੀ। ਮਹਾਰਾਜੇ ਨੇ ਇਹ ਸੱਭ ਕੁੱਝ ਆਪਣੀ ਅੱਖੀਂ ਦੇਖਿਆ। ਮਹਾਰਾਜੇ ਨੇ ਅੱਗੇ ਵੱਧ ਕੇ ਥੈਲਾ ਚੁੱਕਿਆ, ਉਸ ਦੇ ਘਰ ਤੱਕ ਪਹੁੰਚਾ ਦਿੱਤਾ। ਬੁੱਢੇ ਨੂੰ ਇਹ ਪਤਾ ਨਹੀਂ ਸੀ ਕਿ ਥੈਲਾ ਚੁੱਕਣ ਵਾਲਾ ਮਹਾਰਾਜਾ ਰਣਜੀਤ ਸਿੰਘ ਹੈ। ਪਤਾ ਲੱਗਣ ਤੇ ਉਸ ਨੂੰ ਬੜੀ ਸ਼ਰਮ ਆਈ। ਉਸਨੇ ਮਹਾਰਾਜ ਤੋਂ ਮੁਆਫੀ ਮੰਗੀ ਪਰ ਮਹਾਰਾਜ ਨੇ ਇਸ ਗੱਲ ਨੂੰ ਹਾਸੇ ਵਿੱਚ ਟਾਲ ਦਿੱਤਾ।

ਉਪਰੋਕਤ ਪੈਰਾ ਪੜ੍ਹੋ ਤੇ ਹੇਠ ਲਿਖੇ ਪ੍ਰਸ਼ਨਾਂ ਦੇ ਸਹੀ ਉੱਤਰ ਲਿਖੋ:

- ਪ੍ਰ 1 - ਮਹਾਰਾਜ ਲੋਕਾਂ ਦੇ ਦੁੱਖ ਜਾਨਣ ਲਈ ਕੀ ਕਰਦਾ ਸੀ?
- ਪ੍ਰ 2 - ਬੁੱਢੇ ਨੇ ਕਿੰਨਾਂ ਰਾਸ਼ਨ ਲੈ ਲਿਆ ਸੀ?
- ਪ੍ਰ 3 - ਬੁੱਢੇ ਦਾ ਅਨਾਜ ਦਾ ਭਰਿਆ ਥੈਲਾ ਕਿਸਨੇ ਚੁੱਕਿਆ?
- ਪ੍ਰ 4 - ਮਹਾਰਾਜਾ ਰਣਜੀਤ ਸਿੰਘ ਕਿਸ ਤਰ੍ਹਾਂ ਦਾ ਰਾਜਾ ਸੀ?
- ਪ੍ਰ 5 - ਬੁੱਢੇ ਨੇ ਮਹਾਰਾਜ ਤੋਂ ਕੀ ਮੰਗੀ?

(2) ਹੇਠ ਲਿਖਿਆ ਡਿੱਠਾ ਕਾਵਿ-ਟੋਟਾ ਪੜ੍ਹ ਕੇ ਪ੍ਰਸ਼ਨਾਂ ਦੇ ਉੱਤਰ ਲਿਖੋ:

(5 × 1=5)

ਉੱਠ ਸਵੇਰੇ ਜਲਦੀ ਨੁਵੇ, ਬਰੱਸ਼ ਕਰੋ ਤੇ ਰੋਟੀ ਖਾਵੋ।  
ਸੁਸਤੀ ਦਾ ਕਰ ਦਿਓ ਤਿਆਗ, ਤਦ ਆਵੇਗੀ ਛੇਤੀ ਜਾਗ।  
ਮੰਮੀ-ਡੈਂਡੀ ਦਾ ਮੰਨੋ ਕਹਿਣਾ, ਘਰ ਵਿੱਚ ਸਿੱਖੋ ਕਿੱਦਾਂ ਰਹਿਣਾ।

1. ਨਹਾਉਣਾ ਕਦੋਂ ਚਾਹੀਦਾ ਹੈ?
2. ਰੋਟੀ ਕੀ ਕਰ ਕੇ ਖਾਣੀ ਚਾਹੀਦੀ ਹੈ?
3. ਕਿਸ ਦਾ ਤਿਆਗ ਕਰਨ ਲਈ ਕਿਹਾ ਗਿਆ ਹੈ ?
4. 'ਸੁਸਤੀ' ਦਾ ਕੀ ਅਰਥ ਹੈ?
5. ਸਾਨੂੰ ਕਿਸ ਦਾ ਕਹਿਣਾ ਮੰਨਣਾ ਚਾਹੀਦਾ ਹੈ?

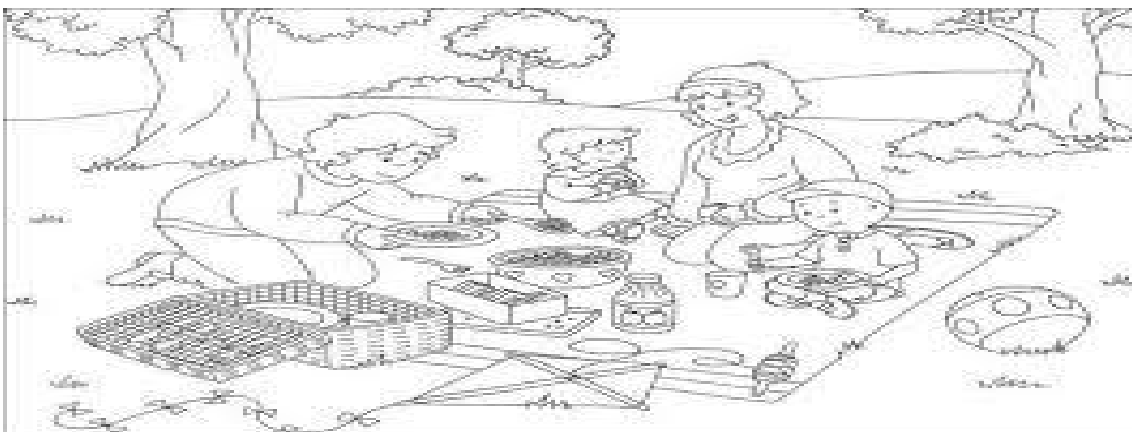
- (ਪ੍ਰਸ਼ਨ 2) ਹੇਠ ਲਿਖਿਆ ਪੈਰਾ ਪੜ੍ਹ ਕੇ ਇਸ ਵਿੱਚੋਂ ਤਿੰਨ ਨਾਂਵ, ਅਤੇ ਤਿੰਨ ਕਿਰਿਆ ਚੁਣ ਕੇ ਲਿਖੋ। (6×0.5=3)

(ਪ੍ਰਸ਼ਨ 3) ਹੇਠ ਲਿਖੀਆਂ ਸਤਰਾਂ ਵਿੱਚੋਂ ਲਕੀਰੇ ਅਸ਼ੁੱਧ ਸ਼ਬਦਾਂ ਨੂੰ ਸ਼ੁੱਧ ਕਰ ਕੇ ਲਿਖੋ ਅਤੇ ਗਿਣਤੀ ਨੂੰ ਪੰਜਾਬੀ

**(4x0.5=2)**

### ਭਾਗ (ੲ) ਪ੍ਰਭਾਵਸ਼ਾਲੀ ਲਿਖਣ ਕੌਸ਼ਲ

- (6)



ਭਾਗ (ਸ) ਪਾਠ-ਪ੍ਰਸਤੁਤਕ

1. ਹੇਠ ਲਿਖੇ ਪ੍ਰਸ਼ਨਾਂ ਦੇ ਉੱਤਰ ਸੰਖੇਪ ਵਿੱਚ ਲਿਖੋ।

(2×1=2)

1. ਸੰਤੀ ਹਰ ਰੋਜ਼ ਕਿਸ ਨੂੰ ਆਪਣਾ ਦੁੱਧ ਪਿਲਾਉਣ ਜਾਂਦੀ ਸੀ?
2. ਰਾਜੂ ਦੀ ਗੱਲ ਸੁਣ ਕੇ ਮਾਮਾ ਜੀ ਕੀ ਕਰਨ ਲੱਗੇ?

2. ਹੇਠ ਲਿਖੇ ਪ੍ਰਸ਼ਨਾਂ ਦੇ ਉੱਤਰ 3-4 ਸਤਰਾਂ ਵਿੱਚ ਲਿਖੋ।

(2×2=4)

1. ਆਜ਼ਾਦੀ ਨੇ ਸੰਤੀ ਨੂੰ ਕਿੱਧਰ ਜਾਂਦੇ ਹੋਏ ਵੇਖਿਆ?
2. 'ਰਾਜੂ ਬਦਲ ਗਿਆ' ਕਹਾਣੀ ਦੇ ਅਧਾਰ ਤੇ ਦੱਸੋ ਰਾਜੂ ਕਿਸ ਤਰ੍ਹਾਂ ਦਾ ਲੜਕਾ ਸੀ?

ਪ੍ਰਸ਼ਨ-3: ਹੇਠ ਲਿਖੇ ਸ਼ਬਦਾਂ ਦੇ ਅਰਥ ਲਿਖੋ।

(2×1=2)

(ੳ) ਜਗ੍ਹਾ (ਅ) ਢੰਗ

ਪ੍ਰਸ਼ਨ-4: ਹੇਠ ਲਿਖੇ ਸ਼ਬਦਾਂ ਦੇ ਵਾਕ ਬਣਾਓ।

(2×1=2)

(ੳ) ਸਤਿਕਾਰ (ਅ) ਕਮਰ

ਪ੍ਰਸ਼ਨ-5: ਹੇਠ ਲਿਖੇ ਵਾਕਾਂ ਵਿੱਚੋਂ ਠੀਕ ਅੱਗੇ (✓) ਅਤੇ (X) ਦਾ ਨਿਸ਼ਾਨ ਲਗਾਓ।

(0.5×2=1)

1. ਰਾਜੂ, ਮਾਮਾ ਜੀ ਨੂੰ ਵੇਖ ਕੇ ਹੱਸਣ ਲੱਗਾ ।
2. ਸੰਤੀ ਨੇ ਸ਼ੇਰ ਦੇ ਬੱਚੇ ਨੂੰ ਆਪਣਾ ਦੁੱਧ ਪਿਲਾਇਆ ।

ਪ੍ਰਸ਼ਨ-6 : ਕਦਰਾਂ-ਕੀਮਤਾਂ 'ਤੇ ਅਧਾਰਿਤ ਪ੍ਰਸ਼ਨ:

(3)

ਪ੍ਰਸ਼ਨ: ਤੁਸੀਂ ਆਪਣੇ ਮੰਮੀ-ਪਾਪਾ ਦੀ ਸੇਵਾ ਕਿਸ ਤਰ੍ਹਾਂ ਕਰੋਗੇ। ਉੱਤਰ ਚਾਰ- ਪੰਜ ਲਾਈਨਾਂ ਵਿੱਚ ਲਿਖੋ।

**Revision Paper Subject- Science**

**Session -2017-18**

**Grade 4**

**Time allotted:**

**Maximum Marks: 40**

**GENERAL INSTRUCTIONS:**

- ) **Read the question paper carefully.**
- ) **The question paper comprises of 4 sections i.e. Sec A,B,C and D.**
- ) **Section A carries 1 MCQ'S and questions contain of one mark each.**
- ) **Section B carries 5 questions of two marks each.**
- ) **Section C carries 3 questions of three marks each.**
- ) **Section D carries 3 questions of five marks each.**
- ) **Attempt the subparts of the questions.**
- ) **All the question are compulsory.**

**Section A**

1. Multiple choice question :
- The stored food in plants is also known as
- A) chlorophyll      B) iodine      C) starch      D) none of these

**Section -B**

2. What raw material is required by the plant to make food? From where does a leaf get all these things?
3. Do you think silk is very costly? Give reason for this.
4. Sam has to make a new house for his family. What first thing he should keep in mind before constructing the house.
5. Explain, how breathing in these animals adapted to where they live?
- A) In terrestrial animal
- B) Aquatic animals
- C) Amphibians

**Section c**

6. In the rainy season, we can see so many droppings in soil, what form these droppings in the soil and what else term we can use for it? How these droppings are helpful to the soil?
7. A) Write three ways by which river water gets contaminated.  
B) Define acid rain. What are the various causes of acid rains?
8. A) Draw the labelled structure showing day and night on the earth.  
B) What do you mean by magma? Describe the three different types of volcanoes.
9. A) Classify the animals according to their natural habitat.  
B) Write any one adaptive feature for animals living in desert, snowy areas and mountains region each.

10. Name at least five synthetic building materials which are used to make a big houses? Write at least one function of each.

#### Section D

11. A) Does photosynthesis take place at twenty –four hours a day? Give appropriate reason behind this.

B) Write the difference between natural fibre and synthetic fibre. (Any three points).

C) Complete the following table.

A) The water pipes and sanitary wares are fixed by him.	B) -----
C) -----(functions)	Painter.
D) Mostly used to hold stone and bricks walls together.	E)-----

12. A). Is it necessary for animals to adapt themselves to their surrounding? Why it so? Give any two examples to support your answer

B) Draw the structure of soil profile or different components of soil.

13. A) Give some information about the air pollution and its effect on our health as well as on the environment

B) Mention some disease that occurs due to water pollution.

C) The oval shape path is known as

D) Why the poles are always cold?

**HALF YEARLY (REVISION EXAM)(2017-18)**  
**SUBJECT- SOCIAL SCIENCE**  
**CLASS – IV**

**Maximum marks:40**

**Attempt all the questions.**

**Section A contains 7 multiple choice questions of one mark each.**

**Section B contains 6 short questions of 3 marks each.**

**Section C contains 2 long questions of 5 marks each.( After completion, attach the map inside your answer book.)**

**SECTION-A**

**Choose the correct answer-**

**(1X7=7)**

i)Which is the national animal of India?(K)

- a)Tiger                      b)Elephant                      c)lion                      d)Eagle

ii)The highest mountain peak Mt.Everest is located in which country.(K)

- a)India                      b)Nepal                      c)Nepal                      d)China

iii)\_\_\_\_\_is the tributary of Ganga.(Un)

- a)Tapi                      b)Yamuna                      c)Beas                      d)Bharamaputra

iv)\_\_\_\_\_is the highest waterfall in our country.(Un)

- a)Jog falls                      b)Kapti falls                      c)Niagara falls                      d)Ucha falls

v)If you want to go in most most expensive mode of transport. you will choose.(Ap)

- a)Airways                      b)Waterways                      c)Railways                      d)Roadways

vi)Jana Gana Mana was originally composed in \_\_\_\_\_language.(Ap)

- a)Punjabi                      b)Hindi                      c)Bengali                      d)Sanskrit

vii)This soil is used to make bricks.(hot)

- a)Mountain soil                      b)Red soil                      c)Laterite soil                      d)Alluvial soil

**Section-B**

**Answer these Questions-**

**(6X3=18)**

i) ‘Wheat the staple food of India’ .Explain the climate require to grow this crop and areas of growth.(Ap)

ii)Explain the Features of Alluvial soil.(Un)

iii) Explain the life of the people in desert. (Un)

iv) Identify the picture of the crop and answer the following questions:-(K)



a) What kind of Climate is required to grow it? (1)

b) Name two states where it is grown? (1)

c) Name uses of this crop? (1)

v) If you are given a chance to visit the USA. Which mode of transportation will you use and why? (hots)

vi) Why do we need Transport? Explain the different types of Transportation? (K)

ii) 'India is divided into states and capitals'. In the light of this statement answer the following questions. (K)

a) Name two neighboring countries in the south side of India. (1)

b) Name the Capital of Maharashtra. (1)

c) Name two capitals which start with the letter 'P'. (0.5)

d) Name the Capital city shared by two states in the southern part of India. (0.5)

### **SECTION-C**

**Answer these Questions-**

**(5X2=10)**

i) Explain about the national emblem and draw its picture.





ii) Can you imagine India without the Himalayas. How it will effect India?(hots)

**Q3. Mark on the physical map of India:-**

**(1X5=5)**

i) Mt. Everest.

ii) Deccan plateau

iii) An area where camels are the main animals .

iv) One tea grown area.

v) One rice grown area.

## Revision paper Mathematics

### Grade 4

Time: 90 minutes

M.M 40

#### Section A

(6 × 0.5 = 3M)

Q1. Fill in the blanks:-

- a) \_\_\_\_\_ value of a number always remains same.
- b) VII + VI = \_\_\_\_\_ ( Write in roman numerals)
- c) 2000 less than 4538 = \_\_\_\_\_
- d)  $10 \times 4 \times 7 =$  \_\_\_\_\_
- e)  $48 \div$  \_\_\_\_\_ = 6
- f) 5 notes of ₹ 500 and 3 notes of ₹ 50 = \_\_\_\_\_

#### Section B

(5 × 2 =15M)

- Q2. Make the greatest and smallest 5 digit numbers using the digits 3 ,0 ,4 .
- Q3. Insert the sign < , > , or =
- a) XXV \_\_\_\_\_ XXIX
  - b) XLVIII \_\_\_\_\_ L
- Q4. Find the sum :-  
 $654 + 9801 + 78$
- Q5. Find the product of :-  
340 and 89
- Q6. If 756 kg sugar is to put in 9 bags .How much sugar will be in each bag ?

#### Section C

(4 × 3 =12M)

- Q7. Find the difference if minuend is 56890 and subtrahend is 45988.
- Q8. If 5743 passengers travel by train from Jalandhar to different places daily .How many passengers will travel in the month of July.
- Q9. The given below data is the number of heavy vehicles in 5 different villages. Prepare the tally marks of the given data.

Village A	Village B	Village C	Village D	Village E
22	17	13	26	15

Q10. During a trip in summer vacation a family spent ₹ 15000 on boarding and lounging, ₹ 18750 on eatables and ₹ 12500 on other charges. Find the approximation money did they spend in all?

### Section D

(3 × 4 =12 M)

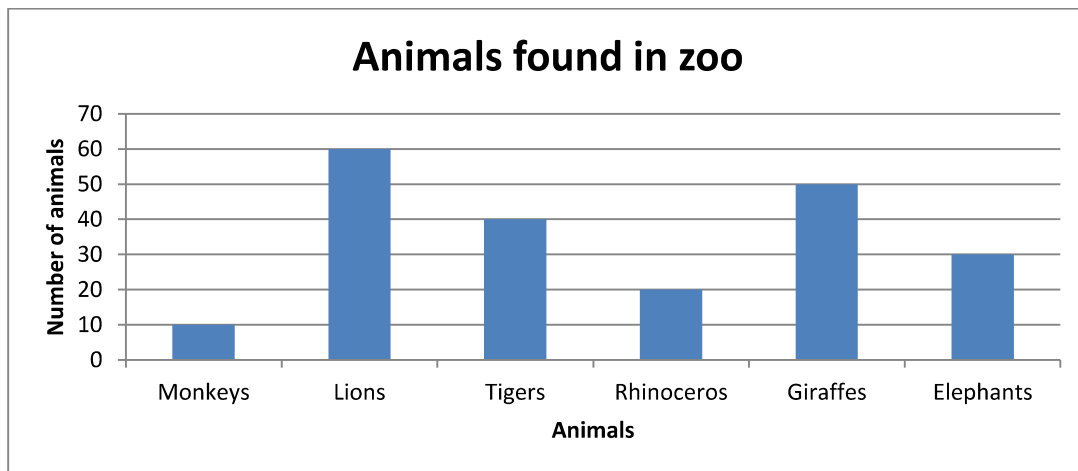
Q11. a) Divide and check  $765 \div 35$

b) Simplify

$$8427 - 4563 + 620$$

Q12. In a theatre the cost of ticket in first row is ₹ 300 and in second row is ₹ 200 . if a family got 3 tickets in first row and 2 tickets in 2row ,how much money did they spend in all ?

Q13. Read the data and answer the following question



- Which information is given in the graph?
- Which is the maximum found animal in the zoo?
- What is on the horizontal scale of the graph?
- How many elephants are in the zoo?
- What is the total number of animals in the zoo?
- How many tigers are less than lions?
- Should we keep animals in the zoo for amusement?
- Where should we keep them?